

How much money is there altogether?



There is £ and p

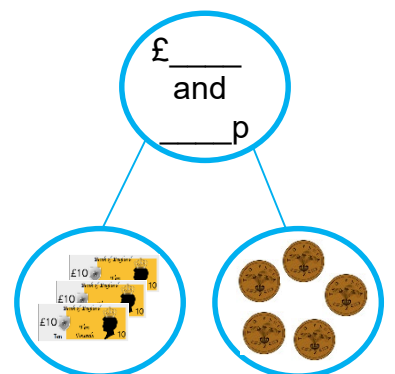
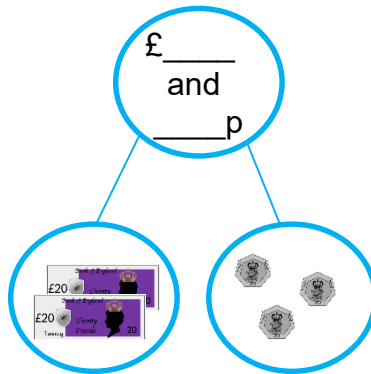
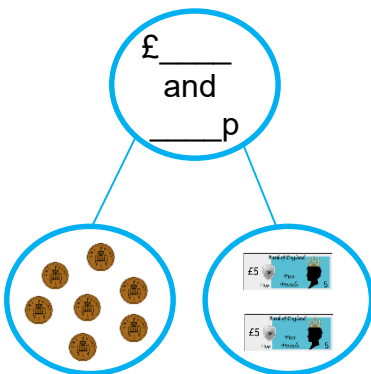
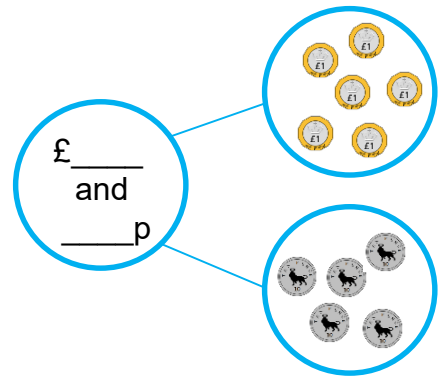
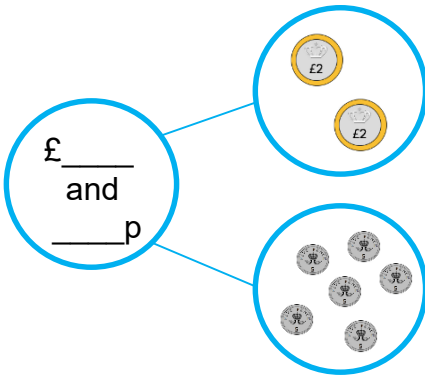
There is £ and p



There is £ and p

There is £ and p

Complete the part whole model.

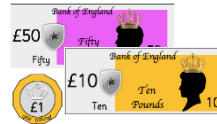



How much money is there altogether?



There is £ _____ and _____ p

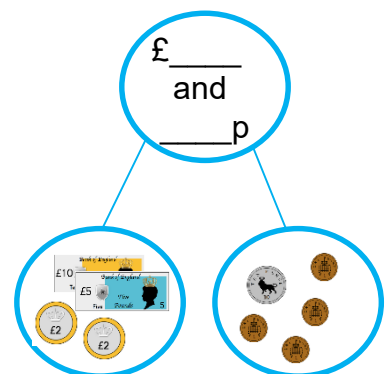
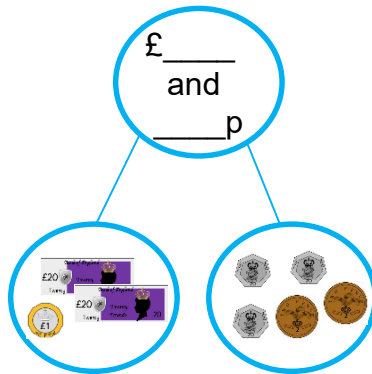
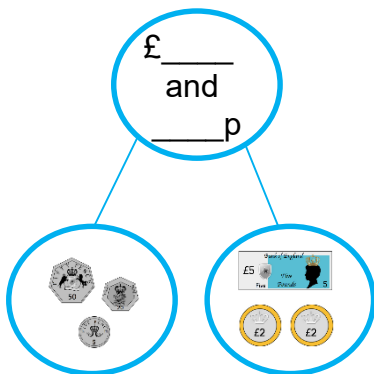
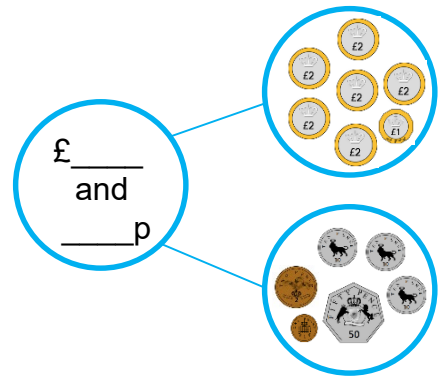
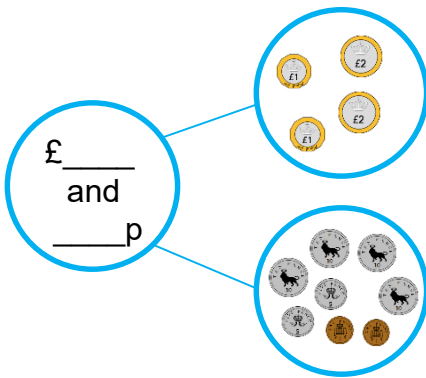
There is £ _____ and _____ p



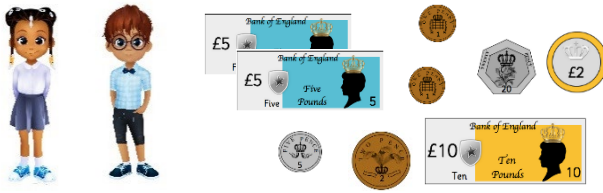
There is £ _____ and _____ p

There is £ _____ and _____ p

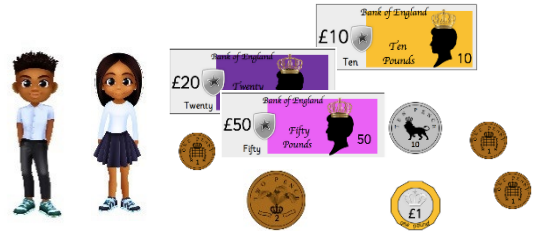
Complete the part whole model.



How much money is there altogether?

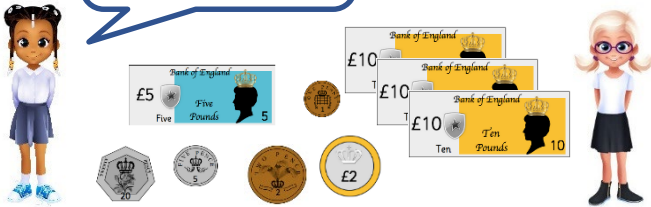


There is £ _____ and _____ p



There is £ _____ and _____ p

I have £2 and 22p.
The rest is Esin's.



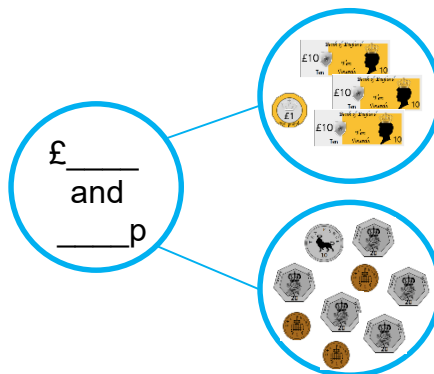
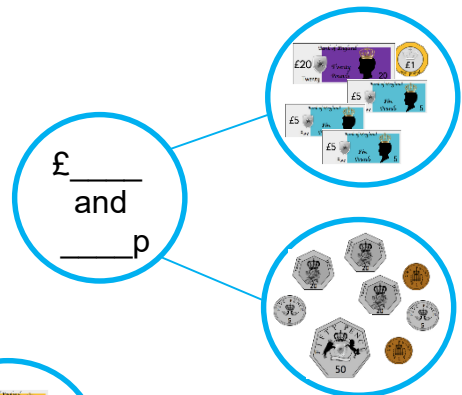
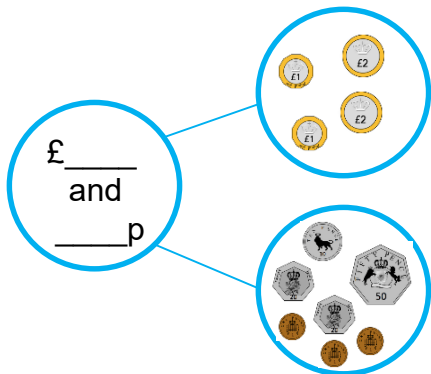
Esin has £ _____ and _____ p

I have £7 and 35p.
The rest is Rosie's.

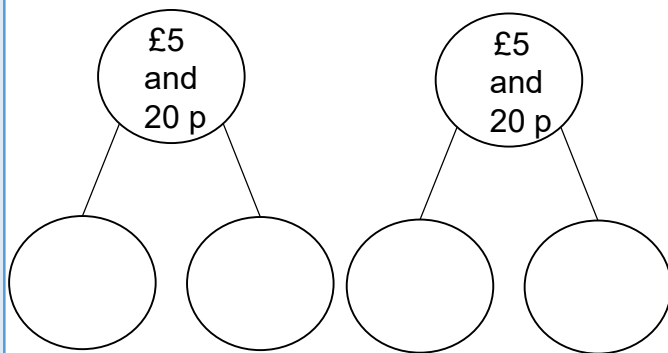


Rosie has £ _____ and _____ p

Complete the part whole model.



Show two ways to complete the part-whole model by drawing money.



Zach has the following coins.



He thinks he has 52 p.

Explain his mistake.

masterthecurriculum.co.uk

Here is a coin and a note.



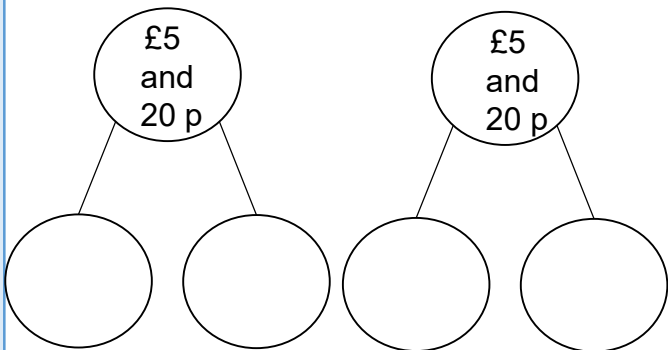
Malachi says, "There is 11p".

Rosie says, "There is £11".

Are either of them correct?

Explain why.

Show two ways to complete the part-whole model by drawing money.



Zach has the following coins.



He thinks he has 52 p.

Explain his mistake.

masterthecurriculum.co.uk

Here is a coin and a note.



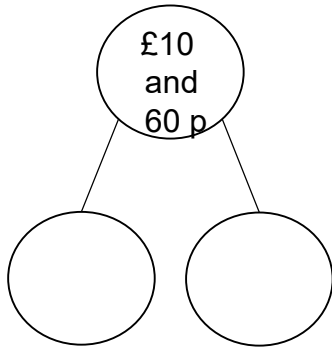
Malachi says, "There is 11p".

Rosie says, "There is £11".

Are either of them correct?

Explain why.

How many ways can you complete the part-whole model by drawing money?
Draw them in your book.



Zach has the following coins.



He thinks he has 51p. Explain his mistake.

Here are some coins and a note.



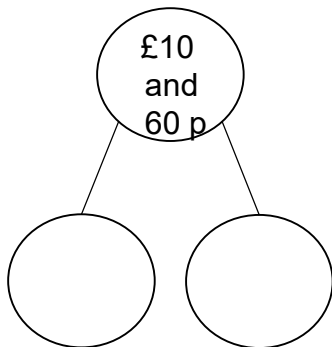
Malachi says, "There is 15p".

Rosie says, "There is £15".

Are either of them correct?

Explain why.

How many ways can you complete the part-whole model by drawing money?
Draw them in your book.



Zach has the following coins.



He thinks he has 51p. Explain his mistake.

Here are some coins and a note.



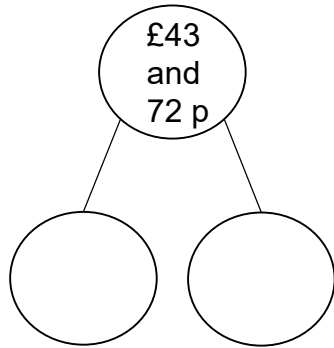
Malachi says, "There is 15p".

Rosie says, "There is £15".

Are either of them correct?

Explain why.

How many ways can you complete the part-whole model by drawing money?
Draw them in your book.

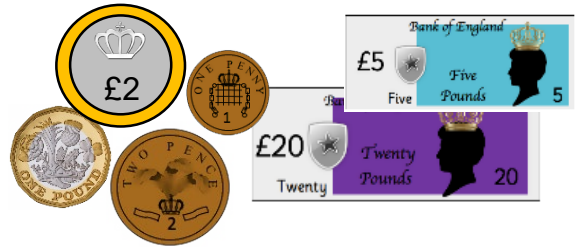


I have a 5p and 2p.
This makes 52p.



Explain Rosie's mistake.

Here are some coins and a note.



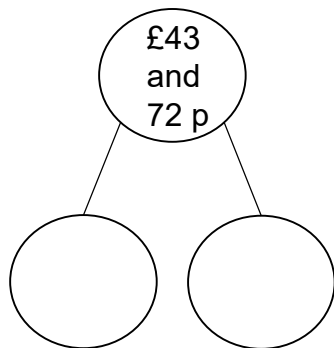
Malachi says, "There is 31p".

Rosie says, "There is £31".

Are either of them correct?

Explain why.

How many ways can you complete the part-whole model by drawing money?
Draw them in your book.

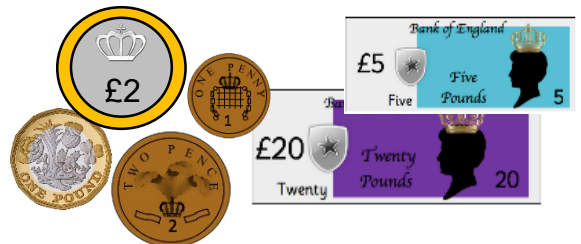


I have a 5p and 2p.
This makes 52p.



Explain Rosie's mistake.

Here are some coins and a note.



Malachi says, "There is 31p".

Rosie says, "There is £31".

Are either of them correct?

Explain why.