

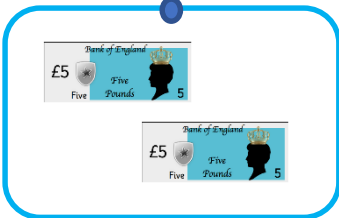
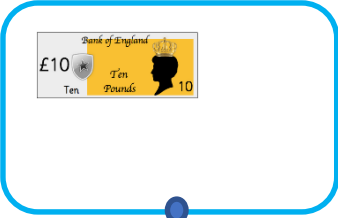


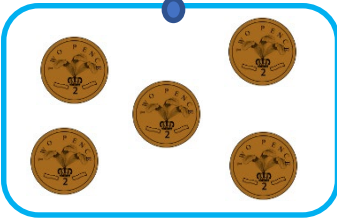
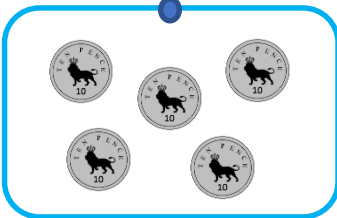









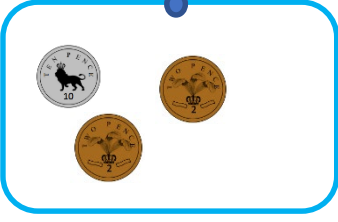
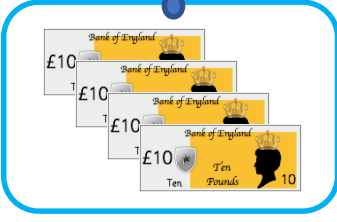
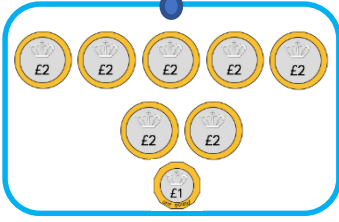
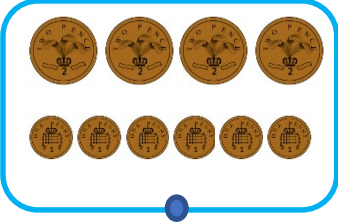
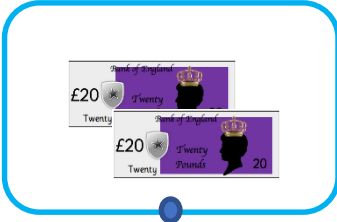
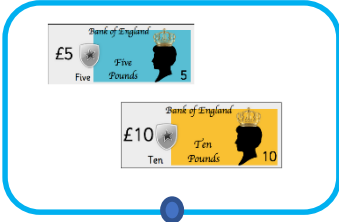

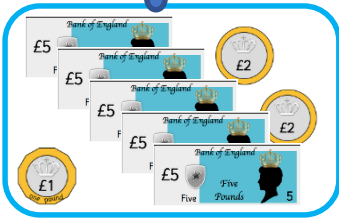

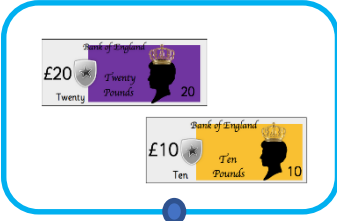



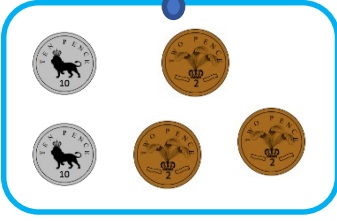
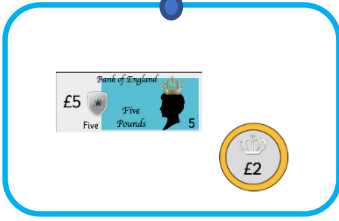

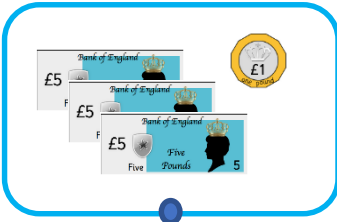



Match the same amounts.



Match the same amounts.



Match the same amounts.

A 7x4 grid of boxes, each containing a different combination of British banknotes and coins. The combinations are as follows:

- Box 1 (Row 1, Col 1):** £5 note, 20p coin, 5p coin, 2p coin, 1p coin, 50p coin.
- Box 2 (Row 1, Col 2):** £5 note, 1p coin, 50p coin, 2p coin.
- Box 3 (Row 1, Col 3):** 20p coin, 5p coin, 1p coin, 2p coin, 1p coin, 2p coin, 1p coin.
- Box 4 (Row 1, Col 4):** 2p coin, 5p coin, 1p coin, 10p coin, 2p coin, 1p coin.
- Box 5 (Row 2, Col 1):** 50p coin, 50p coin, 1p coin, 50p coin, 1p coin.
- Box 6 (Row 2, Col 2):** 2p coin, 1p coin, 5p coin, 1p coin, 5p coin, 10p coin, 2p coin.
- Box 7 (Row 2, Col 3):** £10 note, 20p coin, 10p coin, 1p coin, 20p coin, 10p coin, 1p coin.
- Box 8 (Row 2, Col 4):** 50p coin, 20p coin, 20p coin, 1p coin, 20p coin, 10p coin, 20p coin, 1p coin, 1p coin, 1p coin, 1p coin.
- Box 9 (Row 3, Col 1):** £5 note, £5 note, £5 note, 10p coin, 5p coin, 1p coin, 5p coin, 1p coin.
- Box 10 (Row 3, Col 2):** 5p coin, 2p coin, 1p coin, 1p coin, 5p coin, 1p coin, 5p coin, 1p coin.
- Box 11 (Row 3, Col 3):** £20 note, £10 note, 20p coin, 10p coin, 20p coin, 10p coin.
- Box 12 (Row 3, Col 4):** 1p coin, 1p coin, 1p coin, 2p coin, 1p coin, 2p coin, 1p coin, 1p coin, 1p coin, 1p coin, 1p coin.
- Box 13 (Row 4, Col 1):** £10 note, £10 note, £10 note, 10p coin, 50p coin, 10p coin, 5p coin, 5p coin.
- Box 14 (Row 4, Col 2):** £5 note, 20p coin, 50p coin.
- Box 15 (Row 4, Col 3):** 2p coin, 1p coin, 1p coin, 1p coin, 2p coin, 2p coin, 1p coin, 1p coin.
- Box 16 (Row 4, Col 4):** £10 note, £5 note, 50p coin, 10p coin, 50p coin, 10p coin, 5p coin, 5p coin.
- Box 17 (Row 5, Col 1):** £5 note, 2p coin, 10p coin, 2p coin.
- Box 18 (Row 5, Col 2):** £20 note, £20 note, 10p coin, 50p coin, 10p coin, 50p coin, 10p coin, 2p coin, 2p coin.
- Box 19 (Row 5, Col 3):** £50 note, 50p coin, 2p coin, 1p coin, 2p coin, 1p coin.
- Box 20 (Row 5, Col 4):** £50 note, £10 note, 50p coin, 10p coin, 5p coin, 5p coin, 10p coin, 5p coin, 5p coin, 5p coin, 5p coin.
- Box 21 (Row 6, Col 1):** £20 note, £20 note, £10 note, £5 note, 10p coin, 50p coin, 10p coin, 50p coin.
- Box 22 (Row 6, Col 2):** 2p coin, 2p coin, 2p coin, 2p coin, 2p coin, 2p coin, 1p coin, 1p coin, 1p coin, 1p coin.
- Box 23 (Row 6, Col 3):** £20 note, £20 note, £20 note, 20p coin, 10p coin, 20p coin.
- Box 24 (Row 6, Col 4):** £10 note, £10 note, £10 note, £10 note, 5p coin, 1p coin, 10p coin, 10p coin, 10p coin, 10p coin, 10p coin.

Make 50p in two ways using the coins below.

You can use the coins more than once.



# MONEY

How many ways can you make 10p using only copper coins?



Did you use a strategy?



Make 50p in two ways using the coins below.

You can use the coins more than once.



# MONEY

How many ways can you make 10p using only copper coins?



Did you use a strategy?



Make 60p in two different ways using the coins below.

You can use the coins more than once.



# MONEY

How many ways can you make 10p using only copper coins?

Did you use a strategy?



Make 60p in two different ways using the coins below.

You can use the coins more than once.



# MONEY

How many ways can you make 10p using only copper coins?

Did you use a strategy?



Make the sum of nineteen pence and twenty-two pence in three different ways using the coins below.

You can use the coins more than once.



# MONEY

How many ways can you make 12p using only copper coins?

Try to use a strategy so you find all the ways easily.

Make the sum of nineteen pence and twenty-two pence in three different ways using the coins below.

You can use the coins more than once.



# MONEY

How many ways can you make 12p using only copper coins?

Try to use a strategy so you find all the ways easily.